



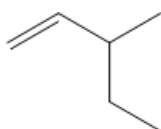
# ORGOREVIEW

## Question Vault

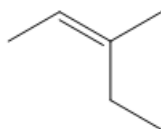
Welcome to orgoreview question vault. We have 5000 more problems for you to solve.

Share

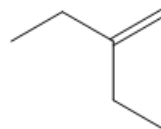
Arrange the following alkenes in order of increasing heat of reaction.



i



ii

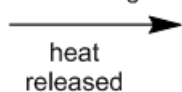


iii

☐ (A)

i    iii    ii

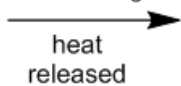
increasing



☐ (B)

ii    iii    i

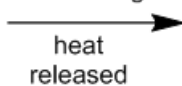
increasing



☐ (C)

ii    i    iii

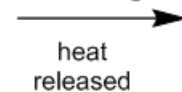
increasing



☐ (D)

iii    ii    i

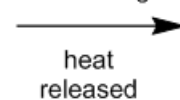
increasing




☐ (E)

iii    i    ii

increasing





### How to Reach Us

Todd's Test Prep  
2255 Glades Road  
Suite 324A  
Boca Raton, Florida 33431  
E-mail: [help@orgoreview.com](mailto:help@orgoreview.com)

### Links

[Contact](#)

[Terms](#)

[Privacy Policy](#)

**follow us**



Copyright 2025. All Rights Reserved.