



ORGOREVIEW

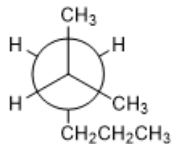
Question Vault

Welcome to orgoreview question vault. We have 5000 more problems for you to solve.

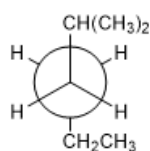
Share

Which one of the following Newman projections does **not** represent 2-methylhexane?

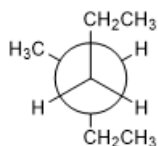
☐ (A)



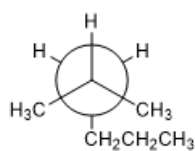
☐ (B)



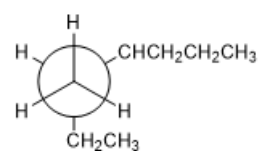
☐ (C)



☐ (D)



☐ (E)



How to Reach Us

Todd's Test Prep
2255 Glades Road
Suite 324A
Boca Raton, Florida 33431
E-mail: help@orgoreview.com

Links

[Contact](#)
[Terms](#)
[Privacy Policy](#)

follow us



Copyright 2025. All Rights Reserved.